

Name: _____

Date: _____


Before and After

Write the times for before and after for each clock.


Thirty Minutes Before

Thirty Minutes After


1.




2.




3.




4.



5.



6.



Name: _____

Date: _____

Before and After


Write the times for before and after for each clock.

Thirty Minutes Before

Thirty Minutes After

1.


8:00



9:00

2.

11:00



12:00

3.


12:30



1:30

4.


6:30



7:30

5.


4:00



5:00

6.

5:30



6:30