

Name: \_\_\_\_\_

Date: \_\_\_\_\_

## Before and After


Write the times for before and after for each clock.

Thirty Minutes Before

Thirty Minutes After

1.


\_\_\_\_\_



\_\_\_\_\_

2.


\_\_\_\_\_



\_\_\_\_\_

3.


\_\_\_\_\_



\_\_\_\_\_

4.


\_\_\_\_\_



\_\_\_\_\_

5.


\_\_\_\_\_



\_\_\_\_\_

6.

\_\_\_\_\_



\_\_\_\_\_

Name: \_\_\_\_\_

Date: \_\_\_\_\_

## Before and After


Write the times for before and after for each clock.

Thirty Minutes Before

Thirty Minutes After

1.


5:00



6:00

2.


1:30



2:30

3.


9:00



10:00

4.


7:00



8:00

5.


9:30



10:30

6.

11:30



12:30