


Name: _____

Date: _____

Minute Hand


Draw the minute hand for each clock.

1.



1:30

2.



3:00

3.




6:30

4.



7:00

5.



11:30

6.




2:00

7.




10:30

8.



5:00

9.



3:30


Name: _____

Date: _____

Minute Hand


Draw the minute hand for each clock.

1.



1:30

2.



3:00

3.




6:30

4.



7:00

5.



11:30

6.




2:00

7.




10:30

8.



5:00

9.



3:30