

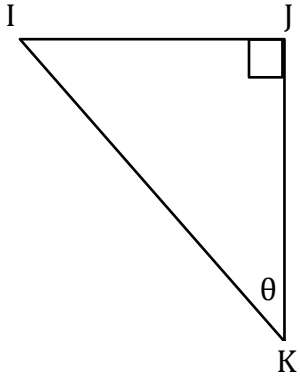
Trigonometry

Name: _____

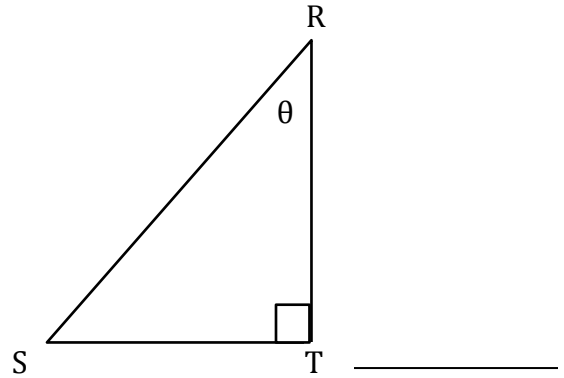
Date: _____

Find the trigonometric ratios.

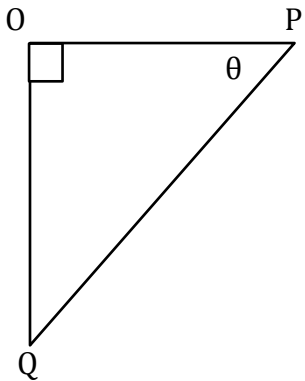
1) $\cot\theta$



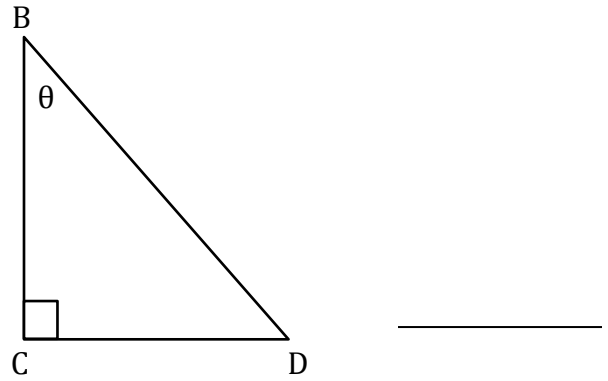
2) $\sec\theta$



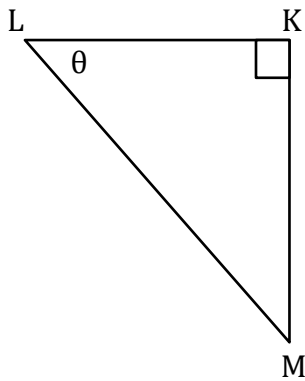
3) $\operatorname{cosec}\theta$



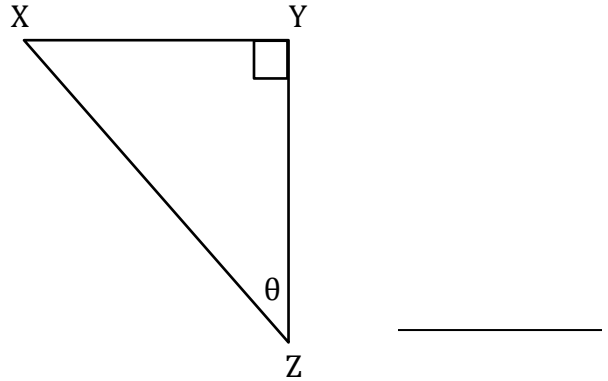
4) $\sec\theta$



5) $\operatorname{cosec}\theta$



6) $\cot\theta$



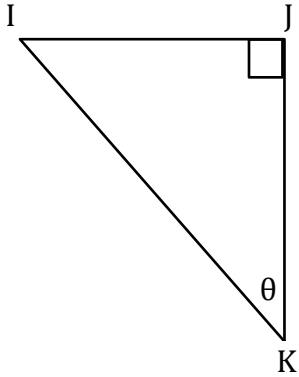
Trigonometry

Name: _____

Date: _____

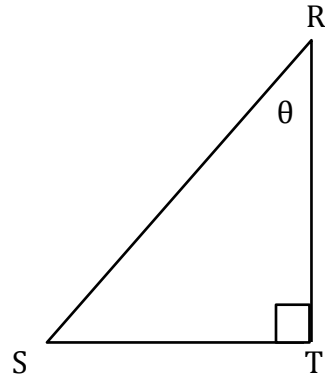
Find the trigonometric ratios.

1) $\cot\theta$



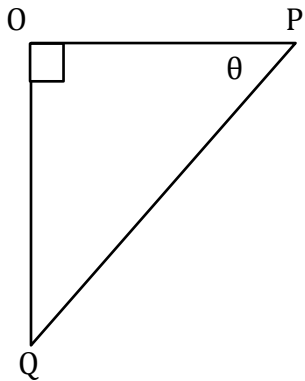
 $\frac{JK}{IJ}$

2) $\sec\theta$



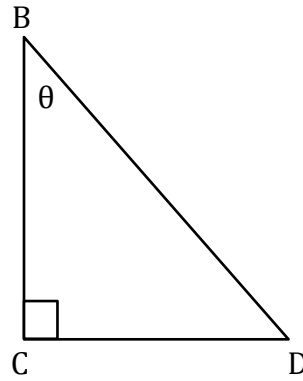
 $\frac{RS}{RT}$

3) $\operatorname{cosec}\theta$



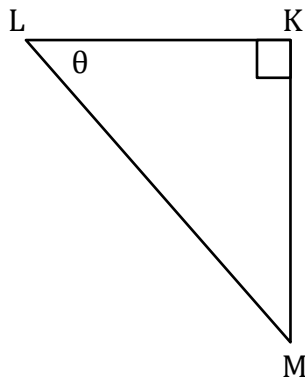
 $\frac{PQ}{OQ}$

4) $\sec\theta$



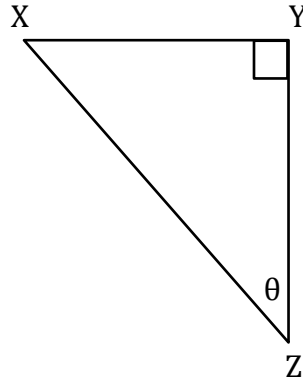
 $\frac{BD}{BC}$

5) $\operatorname{cosec}\theta$



 $\frac{LM}{KM}$

6) $\cot\theta$



 $\frac{YZ}{XY}$