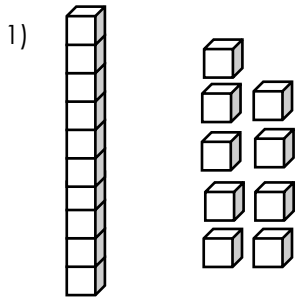


Name: \_\_\_\_\_

Date: \_\_\_\_\_

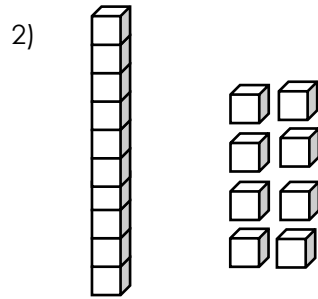
# Place Value

Write the number shown by the base ten blocks.



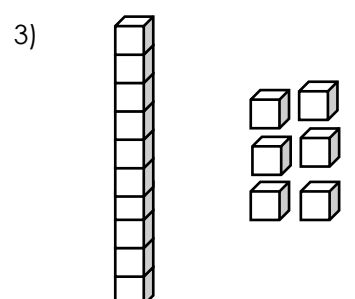
|  |  |
|--|--|
|  |  |
|--|--|

Tens    Ones



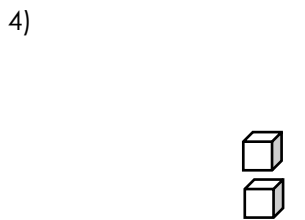
|  |  |
|--|--|
|  |  |
|--|--|

Tens    Ones



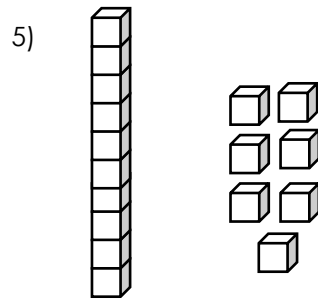
|  |  |
|--|--|
|  |  |
|--|--|

Tens    Ones



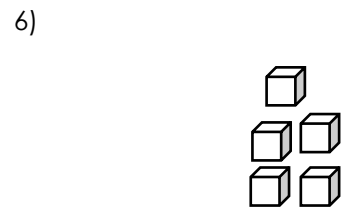
|  |  |
|--|--|
|  |  |
|--|--|

Tens    Ones



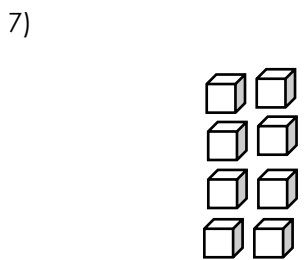
|  |  |
|--|--|
|  |  |
|--|--|

Tens    Ones



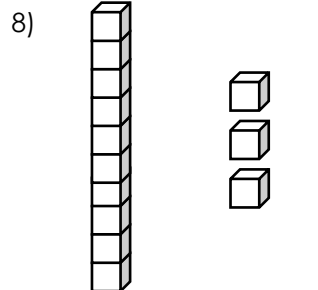
|  |  |
|--|--|
|  |  |
|--|--|

Tens    Ones



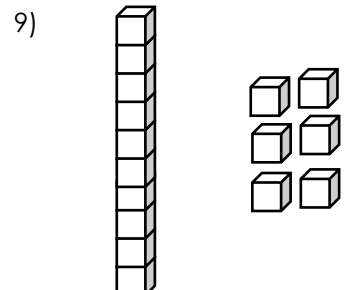
|  |  |
|--|--|
|  |  |
|--|--|

Tens    Ones



|  |  |
|--|--|
|  |  |
|--|--|

Tens    Ones



|  |  |
|--|--|
|  |  |
|--|--|

Tens    Ones

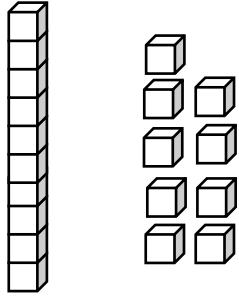
Name: \_\_\_\_\_

Date: \_\_\_\_\_

## Place Value

Write the number shown by the base ten blocks.

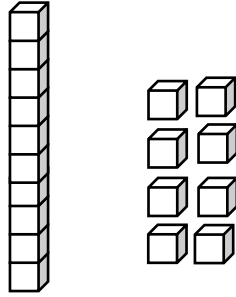
1)



|   |   |
|---|---|
| 1 | 9 |
|---|---|

Tens    Ones

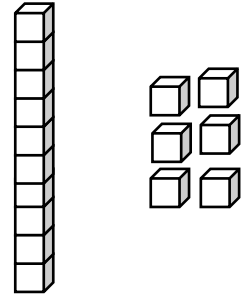
2)



|   |   |
|---|---|
| 1 | 8 |
|---|---|

Tens    Ones

3)



|   |   |
|---|---|
| 1 | 6 |
|---|---|

Tens    Ones

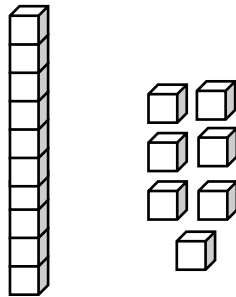
4)



|   |   |
|---|---|
| 0 | 2 |
|---|---|

Tens    Ones

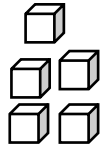
5)



|   |   |
|---|---|
| 1 | 7 |
|---|---|

Tens    Ones

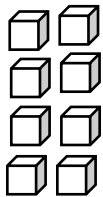
6)



|   |   |
|---|---|
| 0 | 5 |
|---|---|

Tens    Ones

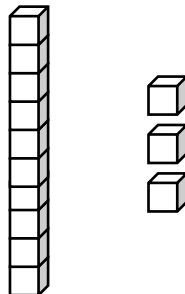
7)



|   |   |
|---|---|
| 0 | 8 |
|---|---|

Tens    Ones

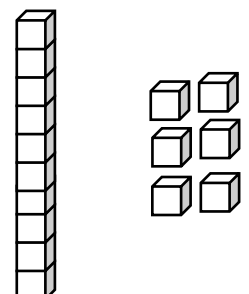
8)



|   |   |
|---|---|
| 1 | 3 |
|---|---|

Tens    Ones

9)



|   |   |
|---|---|
| 1 | 6 |
|---|---|

Tens    Ones