

Name: _____

Date: _____

Draw a minute hand in each clock according to the angle.

Angle: 35°



Angle: 95°



Angle: 75°



Angle: 75°




Angle: 115°



Angle: 45°




Angle: 35°



Angle: 55°



Angle: 145°



Name: _____


Date: _____

Draw a minute hand in each clock according to the angle.

Angle: 35°




Angle: 95°



Angle: 75°




Angle: 75°



Angle: 115°



Angle: 45°



Angle: 35°



Angle: 55°



Angle: 145°

