






Tally Chart






Name: _____

Date: _____

Mr. Bunny counted the stationary items that children brought to the school. Make the tally chart and write the number to answer the questions.



Types of items	Tally marks	Numbers
 bag		
 book		
 pen		
 glue		
 scissor		

8					
7					
6					
5					
4					
3					
2					
1					
					

- 1) There are 5 children in a class. Each child has 6 pens how many pens are there in the whole class?

- 2) 36 stationary items are there in the school and there are 9 children. How many stationary items does a child get?

- 3) If there are 10 more books and 6 more bags. What will be the total count all together?

- 4) If the children spoiled 3 books, 2 bags, 1 glue bottle and 2 pens all together then how many stationary items are left all together?

- 5) Which stationary item is less?






Tally Chart

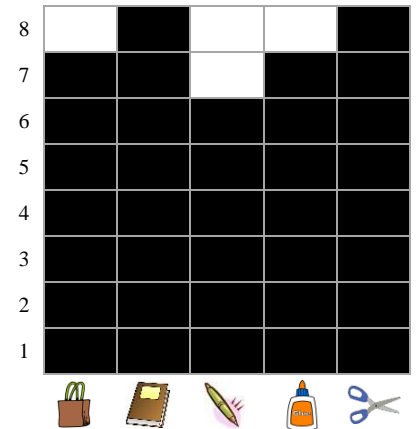
Name: _____

Date: _____

Mr. Bunny counted the stationary items that children brought to the school. Make the tally chart and write the number to answer the questions.



Types of items		Tally marks	Numbers
	bag		7
	book		8
	pen		6
	glue		7
	scissor		8



- 1) There are 5 children in a class. Each child has 6 pens how many pens are there in the whole class?
30
- 2) 36 stationary items are there in the school and there are 9 children. How many stationary items does a child get?
4
- 3) If there are 10 more books and 6 more bags. What will be the total count all together?
31
- 4) If the children spoiled 3 books, 2 bags, 1 glue bottle and 2 pens all together then how many stationary items are left all together?
28
- 5) Which stationary item is less?
Pens