






Tally Chart

Name: _____

Date: _____

Kids brought the below stationary items from the shopping. Answer the questions using tally chart.

| Stationary | Tally Marks |
|---|-------------|
|  | |
|  | |
|  | |
|  | |
|  | |

Fill the blanks using tally chart:

1)

| | | | | |
|--|--|--|--|--|
|  |  |  |  |  |
| | | | | |

2) 15 _____ are needed to be equal to that of glue?

3) If there are 50 books and your friend had taking 16 books. Then _____ books left with you?

4) There are 25 pens. Sam gave 30 more pens. Then _____ pens are there?

5) What are the items that count more than 30?

6) What is the difference in number of books brought by kids to the number of bags?






- 25
- 55
- 30
- 40

Tally Chart

Name: _____

Date: _____

Kids brought the below stationary items from the shopping. Answer the questions using tally chart.

| Stationary | Tally Marks |
|---|-------------|
|  | |
|  | |
|  | |
|  | |
|  | |

Fill the blanks using tally chart:

1)

| | | | | |
|--|--|--|--|--|
|  |  |  |  |  |
| 20 | 25 | 40 | 50 | 30 |

2) 15 _____ pens _____ are needed to be equal to that of glue?

3) If there are 50 books and your friend had taking 16 books. Then _____ 34 _____ books left with you?

4) There are 25 pens. Sam gave 30 more pens. Then _____ 55 _____ pens are there?

5) What are the items that count more than 30?

Glue bottle and Book

6) What is the difference in number of books brought by kids to the number of bags?

- 25
- 55
- 30
- 40