

Name: _____

Date: _____


Addition



Write the addition sentences.

 $+$  $_____ + _____ = _____$

 $+$  $_____ + _____ = _____$

 $+$  $_____ + _____ = _____$

 $+$  $_____ + _____ = _____$

 $+$  $_____ + _____ = _____$

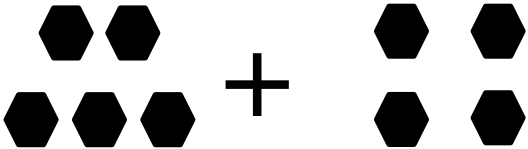
Name: _____

Date: _____


Addition

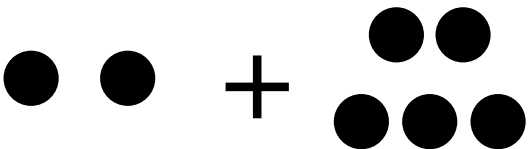
Write the addition sentences.


$$\begin{array}{c} \blacksquare \\ \blacksquare \\ \blacksquare \\ \blacksquare \end{array} + \blacksquare = \underline{4} + \underline{1} = \underline{5}$$


$$\begin{array}{c} \blacksquare \blacksquare \\ \blacksquare \blacksquare \blacksquare \end{array} + \begin{array}{c} \blacksquare \blacksquare \\ \blacksquare \blacksquare \end{array} = \underline{5} + \underline{4} = \underline{9}$$


$$\blacksquare + \begin{array}{c} \blacksquare \blacksquare \\ \blacksquare \blacksquare \blacksquare \end{array} = \underline{1} + \underline{5} = \underline{6}$$


$$\blacksquare \blacksquare + \begin{array}{c} \blacksquare \\ \blacksquare \blacksquare \end{array} = \underline{2} + \underline{3} = \underline{5}$$


$$\blacksquare \blacksquare + \begin{array}{c} \blacksquare \blacksquare \\ \blacksquare \blacksquare \blacksquare \end{array} = \underline{2} + \underline{5} = \underline{7}$$