




Name: _____

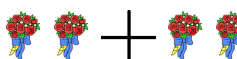
Date: _____


Write each sum.


 $6 + 2 =$


 $5 + 1 =$

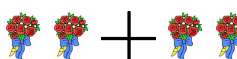
 $5 + 3 =$

 $2 + 2 =$

 $4 + 1 =$

 $2 + 1 =$

 $6 + 3 =$

 $2 + 2 =$