




Name:


Date:


Write each sum.


 $5 + 2 =$


 $3 + 1 =$


 $5 + 3 =$

 $4 + 3 =$

 $6 + 2 =$

 $6 + 2 =$

 $4 + 3 =$

 $4 + 2 =$