





Name: _____



Date: _____

Addition worksheets



 7 $+$  $=$



 2 $+$  $=$



 1 $+$  $=$

 1 $+$  $=$

 3 $+$  $=$

 6 $+$  $=$

 3 $+$  $=$

 4 $+$  $=$