




Name: _____


Date: _____


Write each difference.



$$4 - 3 =$$



$$4 - 2 =$$



$$4 - 2 =$$


$$3 - 2 =$$


$$5 - 2 =$$


$$5 - 3 =$$


$$5 - 4 =$$


$$6 - 3 =$$