







Name: _____



Date: _____



Addition worksheets

 6 +  $4 =$

 4 +  $4 =$



 6 +  $4 =$

 7 +  $4 =$

 5 +  $4 =$

 3 +  $4 =$

 6 +  $4 =$

 3 +  $4 =$